




HOW MANY EGGS?



$$\text{○} \text{○} \text{○} + \text{○} \text{○} \text{○} =$$




$$\begin{array}{c} \text{○} \text{○} \text{○} \\ \text{○} \text{○} \end{array} + \text{○} \text{○} =$$



$$\begin{array}{c} \text{○} \text{○} \\ \text{○} \end{array} + \begin{array}{c} \text{○} \text{○} \text{○} \\ \text{○} \text{○} \text{○} \end{array} =$$



$$\begin{array}{c} \text{○} \text{○} \\ \text{○} \text{○} \end{array} + \begin{array}{c} \text{○} \text{○} \\ \text{○} \text{○} \end{array} =$$



$$\begin{array}{c} \text{○} \text{○} \\ \text{○} \text{○} \end{array} + \text{○} \text{○} =$$

